

2.1

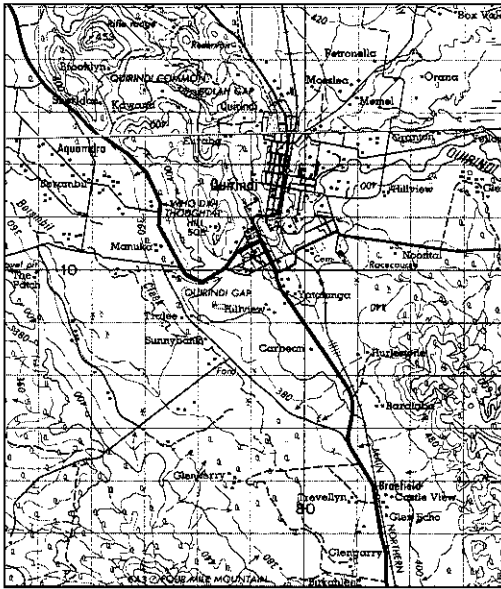
Types of maps

Knowledge and understanding

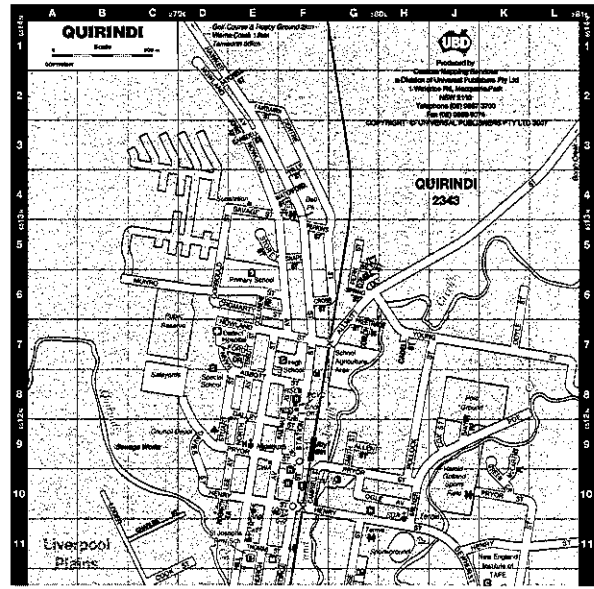
 verbal-linguistic • visual-spatial

Classifying maps

1 a Label the following maps as street or topographic maps.

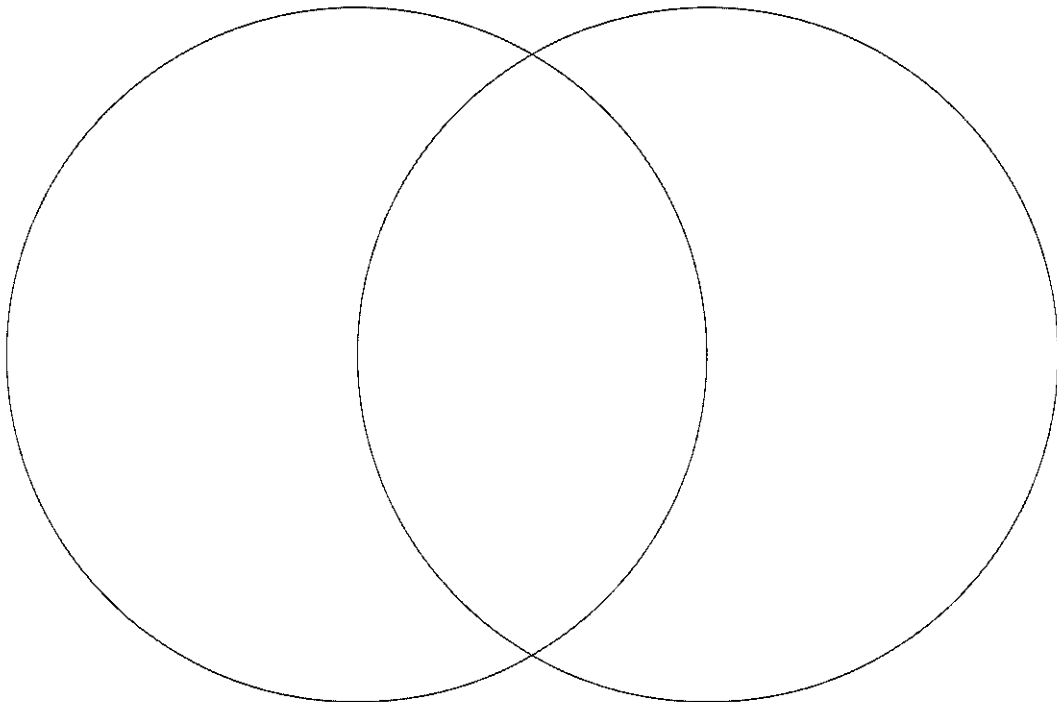



a _____



b _____

b In the Venn diagram, list the differences and similarities between the maps.





2 List two key features of each type of map in the table below.

| Map type | Key features |
|-------------|--------------|
| Topographic | |
| Thematic | |
| Weather | |
| Street | |

3 For each of the following situations, identify the type of map needed and provide a reason for your decision.

a Tammy needs to find her way to her friend's place on the other side of the city.

b Pratik, Karl and Jo are hiking from Jo's farm to a nearby creek.

c Justin has been asked by his boss to identify an area of high population growth.

d The local council is investigating where park and playing fields are located.
